


SPECIAL PROBLEMS

Name \_\_\_\_\_



.....

# 2 or 5 or 10

60 is about \_\_\_\_\_ times as large as 31

51 is about \_\_\_\_\_ times as large as 5

16 is about \_\_\_\_\_ times as large as 7

65 is about \_\_\_\_\_ times as large as 12

200 is about \_\_\_\_\_ times as large as 21

100 is about \_\_\_\_\_ times as large as 19

98 is about \_\_\_\_\_ times as large as 50

45 is about \_\_\_\_\_ times as large as 8

602 is about \_\_\_\_\_ times as large as 298

503 is about \_\_\_\_\_ times as large as 49

59 is about \_\_\_\_\_ times as large as 31

12 is about \_\_\_\_\_ times as large as  $2\frac{1}{2}$

$20\frac{1}{2}$  is about \_\_\_\_\_ times as large as  $10\frac{1}{2}$

$5\frac{1}{2}$  is about \_\_\_\_\_ times as large as  $\frac{1}{2}$

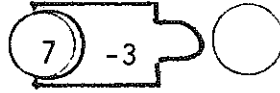


.....

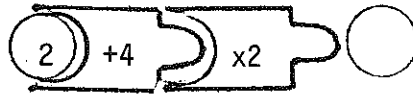
2

—

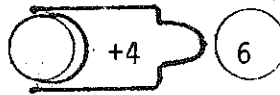
P1.



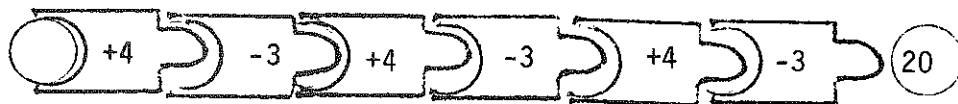
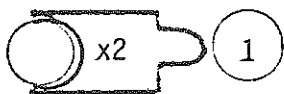
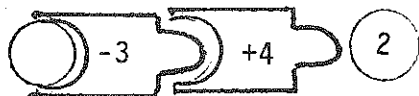
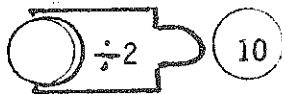
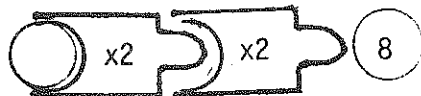
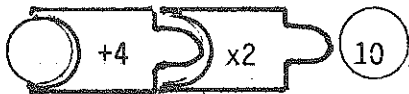
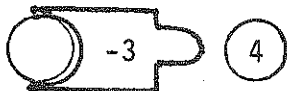
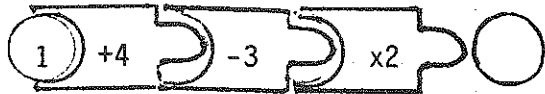
P2.



P3.







x3







# Multiply

$5 \times 8 = \boxed{\phantom{00}}$

$3 \times 35 = \boxed{\phantom{00}}$

$4 \times 210 = \boxed{\phantom{00}}$

$$\begin{array}{r} 9 \\ \times 7 \\ \hline \end{array}$$

$$\begin{array}{r} 43 \\ \times 7 \\ \hline \end{array}$$

$$\begin{array}{r} 623 \\ \times 4 \\ \hline \end{array}$$

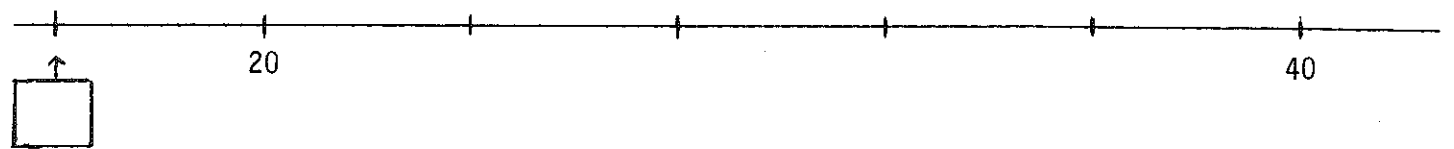
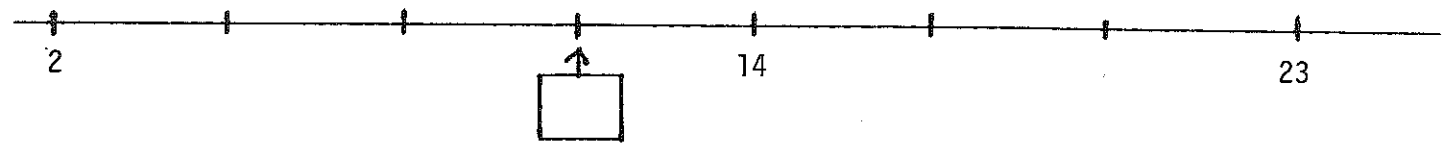

$$\begin{array}{r} 314 \\ \times 34 \\ \hline \end{array}$$



X4a









1. Mr. Jones owns a truck company.  
His trucks can carry 3 cars each.  
He is loading 14 cars onto trucks.  
How many trucks will he need? \_\_\_\_\_
  
2. It takes 4 men to keep an oil well working.  
There are 18 men ready to work.  
How many oil wells can they keep working? \_\_\_\_\_
  
3. We buy 3 pounds of nuts for 25¢.  
How many pounds can we buy for \$1.00? \_\_\_\_\_
  
4. There are 70 ounces in 6 cans of cola.  
How many ounces are there in 3 cans? \_\_\_\_\_
  
5. Amy sold 10 tickets to her school dance.  
Altogether she got \$3.50 for these tickets.  
How much did each ticket cost? \_\_\_\_\_

6. The meter on Bill's car shows  $247\frac{9}{10}$  miles. 

2	4	7	9
---	---	---	---

He drives another  $\frac{1}{10}$  of a mile.

What will the meter show then? 

--	--	--	--



X6a





$12 \times 500$

$6 \times 510$

$899 + 899 + 899 + 899$

$899 \times 5$

$8,000$

$8 \times 16,000$

$38 \times 38$

$39 \times 31$

$3 \times 162$

$4 \times 160$

$6,284 \div 7$

$6,284 \div 8$

$599 \div 2$

$300$

$800 \div 3$

$900 \div 31$

$25,000 \div 60$

$26,000 \div 90$

$\frac{3}{8}$

$\frac{3}{4}$

$\frac{1}{2}$

$\frac{2}{5}$

$\frac{1}{3}$  of 19,000

$\frac{1}{2}$  of 19,000

$\frac{2}{3}$  of 500

$\frac{1}{6}$  of 500



x7

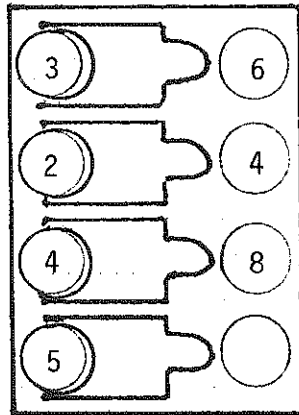




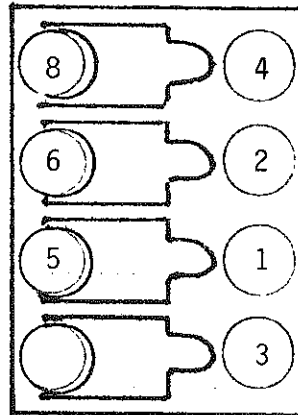


# Number Machines

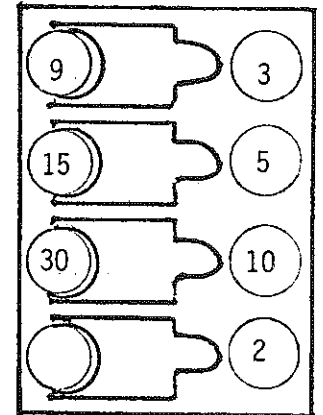
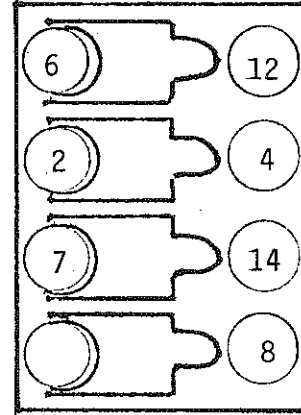
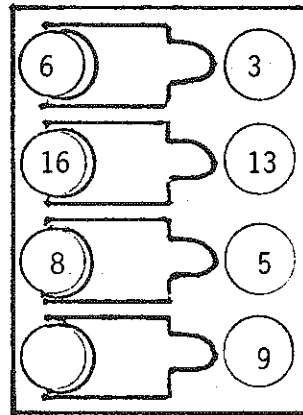
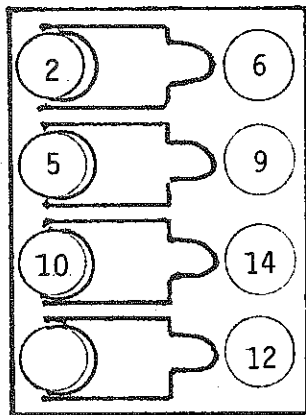
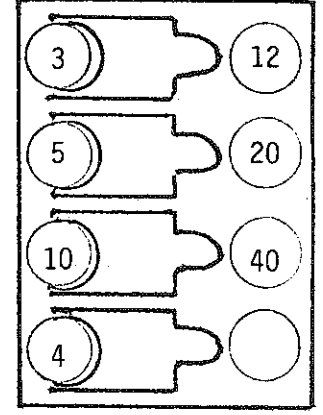
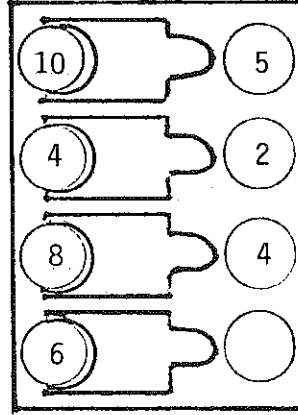
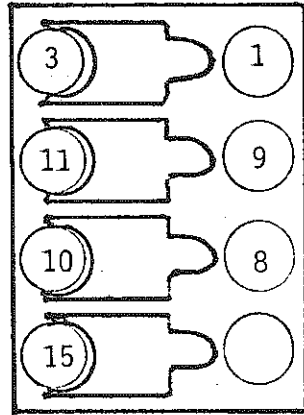
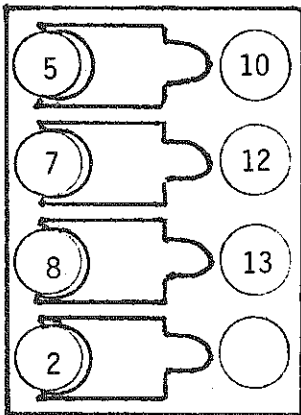
Box A



Box B



\*



\*

\*

\*

\*





How Many Inches?

2 1/2

\_\_\_\_\_

\_\_\_\_\_

\_\_\_\_\_

\_\_\_\_\_

\_\_\_\_\_

\_\_\_\_\_

\_\_\_\_\_

